

Set No. 1

Question Booklet No.

00418

17P/296/21(i)

(To be filled up by the candidate by blue/black ball-point pen)

Roll No.

--	--	--	--	--	--	--	--	--	--

Roll No. (Write the digits in words) 2017 203

Serial No. of OMR Answer Sheet
.....

Day and Date (Signature of Invigilator)

INSTRUCTIONS TO CANDIDATES

(Use only **blue/black ball-point pen** in the space above and on both sides of the **Answer Sheet**)

1. Within 30 minutes of the issue of the Question Booklet, check the Question Booklet to ensure that it contains all the pages in correct sequence and that no page/question is missing. In case of faulty Question Booklet bring it to the notice of the Superintendent/Invigilators immediately to obtain a fresh Question Booklet.
2. Do not bring any loose paper, written or blank, inside the Examination Hall *except the Admit Card without its envelope*.
3. *A separate Answer Sheet is given. It should not be folded or mutilated. A second Answer Sheet shall not be provided. Only the Answer Sheet will be evaluated.*
4. Write your Roll Number and Serial Number of the Answer Sheet by pen in the space provided above.
5. *On the front page of the Answer Sheet, write by pen your Roll Number in the space provided at the top and by darkening the circles at the bottom. Also, wherever applicable, write the Question Booklet Number and the Set Number in appropriate places.*
6. *No overwriting is allowed in the entries of Roll No., Question Booklet no. and Set no. (if any) on OMR sheet and Roll No. and OMR sheet no. on the Question Booklet.*
7. *Any change in the aforesaid entries is to be verified by the invigilator, otherwise it will be taken as unfair means.*
8. *Each question in this Booklet is followed by four alternative answers. For each question, you are to record the correct option on the Answer Sheet by darkening the appropriate circle in the corresponding row of the Answer Sheet, by pen as mentioned in the guidelines given on the first page of the Answer Sheet.*
9. For each question, darken only one circle on the Answer Sheet. If you darken more than one circle or darken a circle partially, the answer will be treated as incorrect.
10. *Note that the answer once filled in ink cannot be changed. If you do not wish to attempt a question, leave all the circles in the corresponding row blank (such question will be awarded zero marks).*
11. For rough work, use the inner back page of the title cover and the blank page at the end of this Booklet.
12. Deposit only **OMR Answer Sheet** at the end of the Test.
13. You are not permitted to leave the Examination Hall until the end of the Test.
14. If a candidate attempts to use any form of unfair means, he/she shall be liable to such punishment as the University may determine and impose on him/her.

Total No. of Printed Pages : 32

[उपर्युक्त निर्देश हिन्दी में अन्तिम आवरण पृष्ठ पर दिये गए हैं।]

SEAL

180.

17P/296/21(i)

ROUGH WORK

रफ़ कार्य

• ए००

2017

17P/296/21(i)

No. of Questions : 120

Time : 2 Hours

Full Marks : 360

Note : (1) Attempt as many questions as you can. Each question carries **3 (Three)** marks. **One mark will be deducted for each incorrect answer. Zero** mark will be awarded for each unattempted question.

(2) If more than one alternative answers seem to be approximate to the correct answer, choose the closest one.

01. The present Lok Sabha is :

- | | |
|----------|----------|
| (1) 12th | (2) 14th |
| (3) 16th | (4) 17th |

02. Which of the following nations is considered the originator of the concept of Micro Finance ?

- | | |
|------------|------------------|
| (1) India | (2) Bangladesh |
| (3) Mexico | (4) South Africa |

03. K M Mani was in news recently, because.

- (1) He was conferred best Parliamentarian award
- (2) He completed 50 consecutive years as MLA
- (3) He was appointed as the Governor of Kerala
- (4) He was appointed as Union Minister

17P/296/21(i)

04. Antwerp is the world's largest diamond trading centre. It is a city in :

- (1) Spain
- (2) Belgium
- (3) France
- (4) Germany

05. Who is the author of the book, *Everyone Loves a Good Drought* ?

- (1) C.Rammanohar Reddy
- (2) Paranjay Guha Takurtha
- (3) P.Sainath
- (4) Medha Phatkar

06. "Spool" is technically an acronym for :

- (1) Simultaneous Peripheral Operation On-line
- (2) Simultaneous Peripheral Operation Off-line
- (3) Simultaneous Peripheral Organization On-line
- (4) System Peripheral Operation On-line

07. Which article of the Indian constitution provides for freedom to practice any profession ?

- (1) 19 (B)
- (2) 19 (D)
- (3) 19 (E)
- (4) 19 (G)

08. In cricket who set the innings record of highest score in One Day Internationals (ODI) :

- (1) Rohit Sharma
- (2) Anwer Hussain
- (3) Sachin Tendulkar
- (4) Veerendra Shehwag

09. Oligopoly is a market structure in which ?
- (1) One conglomerate controls the entire market
 - (2) A small number of firms has the large majority of market share
 - (3) Every firm gets equal importance
 - (4) Government intervenes and controls the entire market
10. Sugarcane production is highest in..... in India.
- (1) Punjab
 - (2) Haryana
 - (3) Uttar Pradesh
 - (4) Maharashtra
11. Rene Laennec invented :
- (1) Thermo meter
 - (2) Stethoscope
 - (3) City scan
 - (4) Balloon surgery
12. Which of the following countries is **not** a part of BRICS ?
- (1) Britain
 - (2) China
 - (3) Russia
 - (4) India
13. Which of film among following has received best picture's Oscar award ?
- (1) La La Land
 - (2) Moonlight
 - (3) Fences
 - (4) Manchester By The Sea

17P/296/21(i)

14. ISRO launched 104 satellites in one go by using the launch vehicle ?

- | | |
|--------------|--------------|
| (1) PSLV-C37 | (2) PSLV-C35 |
| (3) PSLV-C36 | (4) PSLV-CA |

15. India's first transgender school "Sahaj International" has started in which state ?

- | | |
|---------------|--------------------|
| (1) Tamilnadu | (2) Kerala |
| (3) Karnataka | (4) Andhra Pradesh |

16. "BHIM" mobile apps has been launched by Union Government to make digital payments easier. What does "BHIM" stands for ?

- (1) Build Interface for Money
- (2) Built-up Interface for Money
- (3) Bi-aural Interface for Money
- (4) Bharat Interface for Money

17. Which is the headquarters of UNESCO ?

- | | |
|--------------|------------|
| (1) London | (2) Geneva |
| (3) New York | (4) Paris |

18. The element common to all acids is :

- | | |
|---------------|------------|
| (1) Hydrogen | (2) Carbon |
| (3) Sculpture | (4) Oxygen |

19. Which bank was established following the recommendations of Shivaraman Committee ?

- (1) Reserve Bank of India
- (2) State Bank of India
- (3) National Bank for Agriculture and Rural Development (NABARD)
- (4) Andhra Bank

20. Recently, the G-20 Finance Ministers Meet was held in :

- (1) Canada
- (2) France
- (3) Japan
- (4) Germany

21. Who is the Secretary General of UN ?

- (1) Antonio Guterres
- (2) Ban Ki-moon
- (3) Amina Mohammed
- (4) Kofi Annan

22. Dilma rousseff was impeached from the post of the president of :

- (1) Spain
- (2) Austria
- (3) Brazil
- (4) Macedonia

23. Sumithra Mahajan, the Speaker of Lok Sabha inaugurated the South Asian Speaker's Summit 2017 in :

- (1) Madhya Pradesh
- (2) Kerala
- (3) Andhra Pradesh
- (4) Tamilnadu

17P/296/21(i)

24. Gandhiji published in South Africa :

- | | |
|--------------------|--------------------|
| (1) Indian Student | (2) Indian Opinion |
| (3) New India | (4) Young India |

25. The gas usually filled in the electric bulb is :

- | | |
|--------------------|--------------|
| (1) Nitrogen | (2) Hydrogen |
| (3) Carbon dioxide | (4) Oxygen |

26. Which is the richest state in India ?

- | | |
|-------------------|-----------------|
| (1) Uttar Pradesh | (2) West Bengal |
| (3) Goa | (4) Maharashtra |

27. Which of the following is the lightest metal ?

- | | |
|-------------|-------------|
| (1) Mercury | (2) Lithium |
| (3) Lead | (4) Silver |

28. Srihrikota is situated in :

- | | |
|--------------------|---------------|
| (1) Andhra Pradesh | (2) Tamilnadu |
| (3) Telangana | (4) Karnataka |

29. Union Government's UDYA Scheme is meant for :
- (1) Financial restructuring of debt of power distribution companies
 - (2) Providing free power connection to all families below poverty line
 - (3) Promoting the usage of solar energy
 - (4) Creating awareness about the renewable sources of energy
30. Every year National Science Day is celebrated on :
- (1) January 23
 - (2) February 28
 - (3) November 14
 - (4) December 14
31. Alepo city, which has become a battle ground is situated in :
- (1) Iran
 - (2) Iraq
 - (3) Jordan
 - (4) Syria
32. Which newspaper changed its format from Berliner to broadsheet, recently ?
- (1) Business Standard
 - (2) Business Line
 - (3) Mint
 - (4) Financial Chronicle
33. According to Union Ministry of Water and Sanitation districts became from open defecation free (ODF) under 'Swachh Bharat Mission' ?
- (1) 75
 - (2) 100
 - (3) 160
 - (4) 173

17P/296/21(i)

34. The Age of Consent Act was passed in the year :

- | | |
|----------|----------|
| (1) 1881 | (2) 1885 |
| (3) 1891 | (4) 1897 |

35. James Clark Maxwell is known for his research on :

- | | |
|---------------------------|-------------------------|
| (1) Submarines | (2) Birds |
| (3) Electromagnetic waves | (4) Printing technology |

36. Which layer of atmosphere is used for tele communications ?

- | | |
|------------------|-----------------|
| (1) Stratosphere | (2) Troposphere |
| (3) Thermosphere | (4) Ionosphere |

37. Who is author of the book *The Good, the Bad and the Ridiculous* ?

- | | |
|-------------------|--------------------|
| (1) Arundhati Roy | (2) Kushwant Singh |
| (3) M.V. Kamath | (4) M.J. Akbar |

38. Dynamite was invented by :

- (1) G. Ferdinand Von Zeppelin
- (2) Sir Frank Whittle
- (3) Roger Bacon
- (4) Alfred Nobel

39. Which Indian movie was conferred the Art Cinema Award in the Forum Segment at the 2017 Berlin International Film Festival in Germany ?

- (1) Dangal (2) Court
(3) Newton (4) Try This

40. Who is the present Chairperson of National Human Rights Commission ?

- (1) Justice R.M. Lodha
(2) Justice K.G. Bala Krishana
(3) Justice H.L Dattu
(4) Justice T.S. Thakur

41. Find the odd man out :

1, 4, 9, 16, 23, 25, 36

- (1) 9 (2) 23
(3) 25 (4) 36

42. Puja walked from X to Y in the east 10 feet. then she turned to the right and walked 3 feet. Again she turned to the right and walked 14 feet. How far is she from X ?

- (1) 4 feet (2) 5 feet
(3) 24 feet (4) 27 feet

47. Find the odd man out :

41, 43, 47, 53, 61, 71, 73, 81

(1) 61

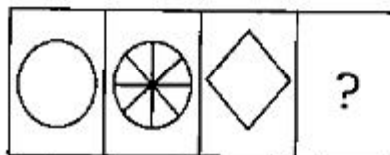
(2) 71

(3) 73

(4) 81

48. Select a suitable figure from the answer Figures that would replace the question mark (?).

Problem Figures :



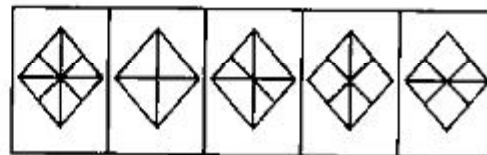
(A)

(B)

(C)

(D)

Answer Figures :



(1)

(2)

(3)

(4)

(5)

(1) 4

(2) 5

(3) 1

(4) 2

49. If 3 men or 4 women can reap a field in 43 days, how long will 7 men and 5 women take to reap it ?

(1) 23

(2) 19

(3) 15

(4) 12

60. Sikhs who are teachers but not cricketers :

- (1) a (2) c
(3) e (4) d

Direction (Questions 61-65) : The following table gives the percentage of the marks obtained by seven students in six different subjects in an examination. Read the table carefully and answer the questions 61-65.

The Numbers in the Brackets give the Maximum Marks in each Subject :

Student	Subject (Max. Marks)					
	Maths (150)	Chemistry (130)	Physics (120)	Geography (100)	History (60)	Computer Science (40)
Preethi	120	90	100	60	40	30
Pooja	140	80	80	40	60	25
Soumya	90	70	70	70	30	40
Rani	80	85	80	80	50	40
Madu	80	95	85	95	50	35
Lavanya	70	75	95	85	40	30
Geeta	95	95	110	75	60	30

67. A man purchases 8 pens for Rs. 9 and sells 9 Pens for rupees 8. How much percentage of profit or loss does he make ?

- | | |
|------------------|-----------------|
| (1) 20.98% loss | (2) 22.05% loss |
| (3) 22.05 profit | (4) 21.98 loss |

Direction (Questions 68-70) : Read the following information and answer the given questions. 68. S is the mother of D. K is the brother of D. K is the only son of M. M is the son of U. U is the husband of T. T is the mother of Y.

68. If D is married to X, then how is X related to M ?

- | | |
|----------------|---------------------|
| (1) Son-in-law | (2) Daughter-in-law |
| (3) Son | (4) Niece |

69. How is T related to K ?

- | | |
|-------------------|-----------------|
| (1) Mother | (2) Aunt |
| (3) Granddaughter | (4) Grandmother |

70. How is S related to Y ?

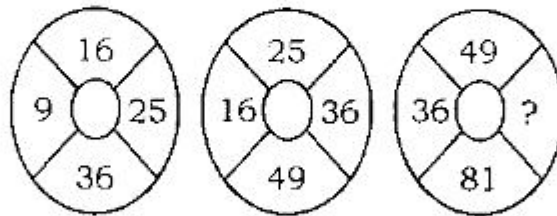
- | | |
|------------|-------------------|
| (1) Sister | (2) Cousin |
| (3) Niece | (4) Sister-in-law |

71. A sum of money doubles itself in 10 years at simple interest. What is the rate of interest ?

- | | |
|---------|---------|
| (1) 12% | (2) 13% |
| (3) 10% | (4) 11% |

17P/296/21(i)

72. Which one will replace the question mark ?



- (1) 64
(3) 169

- (2) 144
(4) 56

Direction (Questions 73-75) : What will come in place of question mark (?) in the following number series ?

73. 2, 1 3, 2 4, 3 5, 4 ?

- (1) 4
(3) 6

- (2) 5
(4) 7

74. 1, 4, 9, 16, 25, ?

- (1) 36
(3) 54

- (2) 51
(4) 56

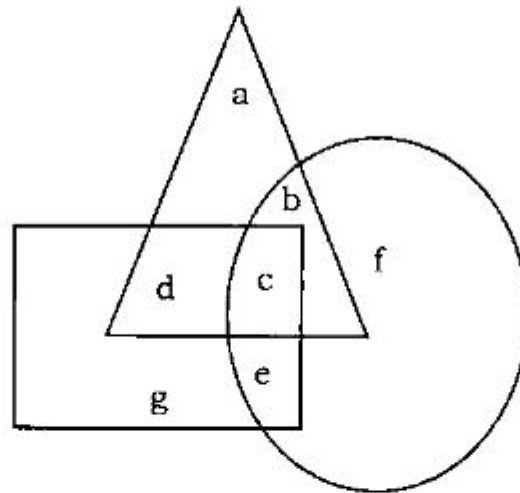
75. 1, 8, 27, 64, 125, 216, ?

- (1) 313
(3) 333

- (2) 323
(4) 343

76. Three pipes A,B and C can fill a cistern in 6 hrs. After working together for 2 hours, c is closed and A and B fill the cistern in 8 hrs. Then find the time in which the cistern can be filled by pipe C.
- (1) 10 hrs (2) 12 hrs
(3) 15 hrs (4) 16 hrs
77. A father said to his son, "I was as old as you are at the present at the time of your birth". If the father's age is 38 years now, the son's age five years back was:
- (1) 14 years (2) 19 years
(3) 33 years (4) 38 years

Direction (Questions 78-80) : Please read the following figure and answer the questions 78 to 80.



Circle -- Doctors

Square -- Musicians

Triangle -- Post - Graduates

the country from a terrible war. These words are intended to fill the audience with fear, thus making them want to vote for him. Similarly, a charity organization that helps animals might show an audience pictures of injured dogs and cats. These images are intended to fill the viewers with pity. If the audience feels bad for the animals, they will be more likely to donate money. Logos is the use of facts, information, statistics, or other evidence to make your argument more convincing. An audience will be more likely to believe you if you have data to back up your claims. For example, a commercial for soap might tell you that laboratory tests have shown that their soap kills all 7,000,000 of the bacteria living on your hands right now. This piece of information might make you more likely to buy their brand of soap. Presenting this evidence is much more convincing than simply saying "our soap is the best!" Use of logos can also increase a speaker's ethos; the more facts a speaker includes in his argument, the more likely you are to think that he is educated and trustworthy. Although ethos, pathos, and logos all have their strengths, they are often most effective when they are used together. Indeed, most speaker use a combination of ethos, pathos, and logos to persuade their audiences.

81. 'A speaker who is trying to convince an audience to vote for him saying that he alone can save the country from a terrible war' is using :
- | | |
|-----------|--------------|
| (1) Logos | (2) Pathos |
| (3) Ethos | (4) Rhetoric |
82. Logos is
- (1) Connecting to emotions
 - (2) Establishing credibility
 - (3) Using Facts
 - (4) Using similes

17P/296/21(i)

83. If the audience feels bad for the animals

- (1) They will avoid seeing the animals again.
- (2) They will feel disgusted
- (3) They will be more likely to donate money.
- (4) They will domesticate the animals.

84. What is the antonym of the word 'Pity' ?

- (1) Sympathy
- (2) Empathy
- (3) Apathy
- (4) Cruelty

85. According to the passage, logos can build ethos because :

- (1) An audience is more easily convinced by facts and information than simple appeals to emotions like pity or fear
- (2) An audience is more likely to trust a speaker who uses evidence to support his argument
- (3) A speaker who overuses pathos might make an audience too emotional; audiences who are too frightened or too sad are unlikely to be persuaded
- (4) A speaker can use misleading or false information to make his argument seem more convincing.

Directions : (Questions Nos **86-90**): Identify the word with similar meaning from the four options given after each of the following.

86. Implore

- (1) Entreat
- (2) Explore
- (3) Analyze
- (4) Regret

87. Meticulous

- (1) Miserly
- (2) Scurrilous
- (3) Famous
- (4) Careful

88. Embezzle

- | | |
|----------------|--------------------|
| (1) Remunerate | (2) Balance |
| (3) Save | (4) Misappropriate |

89. Detest

- | | |
|-------------|------------|
| (1) Protest | (2) Detect |
| (3) Hate | (4) Invade |

90. Exonerate

- | | |
|-------------|-------------|
| (1) Absolve | (2) Applaud |
| (3) Abuse | (4) Pour |

Directions : (Questions Nos. 91-95) Identify the word with opposite meaning from the four options given after each of the following :

91. Amenable

- | | |
|--------------|-----------|
| (1) Credible | (2) Noble |
| (3) Flexible | (4) Rigid |

92. Concur

- | | |
|----------------|--------------|
| (1) Victorious | (2) Amicable |
| (3) Agree | (4) Disagree |

93. Demur

- | | |
|---------------|-----------------|
| (1) Cooperate | (2) Crystallize |
| (3) Retard | (4) Impetuous |

94. Nefarious

- | | |
|---------------|--------------|
| (1) Heinous | (2) Infamous |
| (3) Atrocious | (4) Honest |

17P/296/21(i)

95. Vanity

- | | |
|--------------|------------------|
| (1) Pride | (2) Conceit |
| (3) Humility | (4) Ostentatious |

Directions : (96-100): Choose the correctly spelt word.

- | | |
|-----------------------------|-----------------|
| 96. (1) Gracious | (2) Gratiuous |
| (3) Grascious | (4) Gracious |
| 97. (1) Technique | (2) Techniq |
| (3) Technik | (4) Techinik |
| 98. (1) Loquacious | (2) Locquacious |
| (3) Loquatious | (4) Locqesious |
| 99. (1) Beaurocracy | (2) Bureaocracy |
| (3) Bureaucracy | (4) Burocracy |
| 100. (1) Renaissance | (2) Renaisance |
| (3) Renaissence | (4) Renaisence |

Directions : (Question Nos 101-105) Choose the correct meaning of the idiom underlined in the following sentences.

101. He is as bit a loose cannon :

- | | |
|-------------------|---------------|
| (1) Unpredictable | (2) Forgetful |
| (3) Irresponsible | (4) Deceptive |

102. She took one of the cookies, but I turned a blind eye :

- (1) Ignore
- (2) Pretend to have not noticed
- (3) Notice with half opened eyes
- (4) Set aside

103. When she was given assignment, she considered it as a piece of cake.

- (1) Gift
- (2) Very easy
- (3) Dream
- (4) Delightful

104. The abortion issue is a political hot potato in many countries.

- (1) Something that is interesting
- (2) Something sensational
- (3) Something that is difficult to deal with
- (4) Some thing that concerns women

105. The boss examined my report with a fine tooth comb before submitting it to the senior management.

- (1) Examine something carefully
- (2) Examine not so seriously
- (3) Examine with positive attitude
- (4) Examine with negative attitude

Directions : (Questions Nos 106-100) there are four underlined parts in each sentence given below. One of the underlined parts has an error. Identify the error in each sentence by substituting the alternative given with each option.

106. He is studying in the school for last for years without any gap

- (1) has been
- (2) at
- (3) since
- (4) with no

17P/296/21(i)

107. She always feels that she is a most beautiful girl among her classmates :

- | | |
|------------|-------------|
| (1) feel | (2) the |
| (3) beauty | (4) between |

108. They have been asked to take the decision from the spot :

- | | |
|---------------|---------|
| (1) hand been | (2) for |
| (3) a | (4) on |

109. He has been suffering with Cancer for last two years without any improvement.

- | | |
|-----------|-------------|
| (1) is | (2) from |
| (3) Since | (4) with no |

110. The train will leave at 8.p.m, we must be ready at 7.30 pm so that we can reach the station in time.

- | | |
|------------------|------------|
| (1) will be left | (2) should |
| (3) by | (4) may |

Direction (Questions Nos. **111-115**) : Identify the correct answer to fill the blanks :

111. Geysers have often been compared to volcanoes they both emit hot liquids from below the Earth's surface :

- | | |
|-----------------|-------------------|
| (1) due to | (2) because |
| (3) in spite of | (4) regardless of |

112. During the early period of ocean navigation, any need for sophisticated instruments and techniques.

- (1) so that hardly
- (2) where there hardly was
- (3) hardly was
- (4) there was hardly

113. The first article of the United States Constitution given Congress to pass laws.

- (1) the power
- (2) has the power
- (3) the power is
- (4) of the power

114. The fact money orders can usually be easily cashed has made them a popular form of payment.

- (1) of
- (2) that
- (3) is that
- (4) which is

115. Throughout the animal kingdom, bigger than the elephant.

- (1) whale is only the
- (2) only the whale
- (3) is the whale only
- (4) only whale is the

Directions : (Questions No. **116-120**): The given sentence is divided into three parts numbered **(1)**, **(2)** and **(3)** . one of these parts may have error. Select the error out part. if you think there is no error in any part of the sentence, select the option number **(4)**, which indicates no error.

116. There is/plenty of books/in Shathri's library. No error.

- (1)
- (2)
- (3)
- (4)

17P/296/21(i)

117. Hema always/feels that/she is superior than others. No error

(1) (2) (3) (4)

118. One cannot be dependent/on his/resources always. No error

(1) (2) (3) (4)

119. Rajesh is/a tallest boy/among his classmates. No error

(1) (2) (3) (4)

120. Dinesh want to/start a new business/but he did not have money. No error

(1) (2) (3) (4)

17P/296/21(i)

ROUGH WORK
रफ़ कार्य

अभ्यर्थियों के लिए निर्देश

(इस पुस्तिका के प्रथम आवरण पृष्ठ पर तथा उत्तर-पत्र के दोनों पृष्ठों पर केवल नीली-काली बाल-प्वाइंट पेन से ही लिखें)

1. प्रश्न पुस्तिका मिलने के 30 मिनट के अन्दर ही देख लें कि प्रश्नपत्र में सभी पृष्ठ मौजूद हैं और कोई प्रश्न छूटा नहीं है। पुस्तिका दोषयुक्त पाये जाने पर इसकी सूचना तत्काल कक्ष-निरीक्षक को देकर सम्पूर्ण प्रश्नपत्र की दूसरी पुस्तिका प्राप्त कर लें।
2. परीक्षा भवन में लिफाफा रहित प्रवेश-पत्र के अतिरिक्त, लिखा या सादा कोई भी खुला कागज साथ में न लायें।
3. उत्तर-पत्र अलग से दिया गया है। इसे न तो मोड़ें और न ही विकृत करें। दूसरा उत्तर-पत्र नहीं दिया जायेगा। केवल उत्तर-पत्र का ही मूल्यांकन किया जायेगा।
4. अपना अनुक्रमांक तथा उत्तर-पत्र का क्रमांक प्रथम आवरण-पृष्ठ पर पेन से निर्धारित स्थान पर लिखें।
5. उत्तर-पत्र के प्रथम पृष्ठ पर पेन से अपना अनुक्रमांक निर्धारित स्थान पर लिखें तथा नीचे दिये वृत्तों को गाढ़ा कर दें। जहाँ-जहाँ आवश्यक हो वहाँ प्रश्न-पुस्तिका का क्रमांक तथा सेट का नम्बर उचित स्थानों पर लिखें।
6. ओ० एम० आर० पत्र पर अनुक्रमांक संख्या, प्रश्नपुस्तिका संख्या व सेट संख्या (यदि कोई हो) तथा प्रश्नपुस्तिका पर अनुक्रमांक और ओ० एम० आर० पत्र संख्या की प्रविष्टियों में उपरिलेखन की अनुमति नहीं है।
7. उपर्युक्त प्रविष्टियों में कोई भी परिवर्तन कक्ष निरीक्षक द्वारा प्रमाणित होना चाहिये अन्यथा यह एक अनुचित साधन का प्रयोग माना जायेगा।
8. प्रश्न-पुस्तिका में प्रत्येक प्रश्न के चार वैकल्पिक उत्तर दिये गये हैं। प्रत्येक प्रश्न के वैकल्पिक उत्तर के लिए आपको उत्तर-पत्र की सम्बन्धित पंक्ति के सामने दिये गये वृत्त को उत्तर-पत्र के प्रथम पृष्ठ पर दिये गये निर्देशों के अनुसार पेन से गाढ़ा करना है।
9. प्रत्येक प्रश्न के उत्तर के लिए केवल एक ही वृत्त को गाढ़ा करें। एक से अधिक वृत्तों को गाढ़ा करने पर अथवा एक वृत्त को अपूर्ण भरने पर वह उत्तर गलत माना जायेगा।
10. ध्यान दें कि एक बार स्याही द्वारा अंकित उत्तर बदला नहीं जा सकता है। यदि आप किसी प्रश्न का उत्तर नहीं देना चाहते हैं, तो संबंधित पंक्ति के सामने दिये गये सभी वृत्तों को खाली छोड़ दें। ऐसे प्रश्नों पर शून्य अंक दिये जायेंगे।
11. रफ कार्य के लिए प्रश्न-पुस्तिका के मुखपृष्ठ के अंदर वाला पृष्ठ तथा उत्तर-पुस्तिका के अंतिम पृष्ठ का प्रयोग करें।
12. परीक्षा के उपरान्त केवल ओ एम आर उत्तर-पत्र परीक्षा भवन में जमा कर दें।
13. परीक्षा समाप्त होने से पहले परीक्षा भवन से बाहर जाने की अनुमति नहीं होगी।
14. यदि कोई अभ्यर्थी परीक्षा में अनुचित साधनों का प्रयोग करता है, तो वह विश्वविद्यालय द्वारा निर्धारित दंड का/की, भागी होगा/होगी।

SEAL